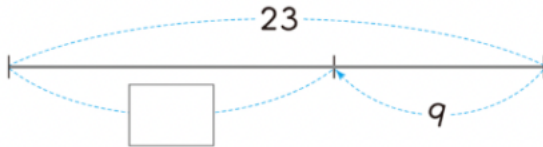


01 Work out the calculation.



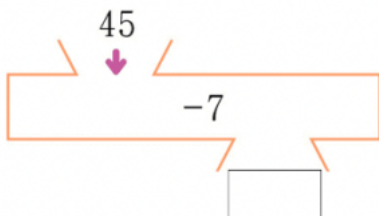
02 Fill in the missing number.

$$6 - 5 = 1 \rightarrow 1 + \square = 6$$

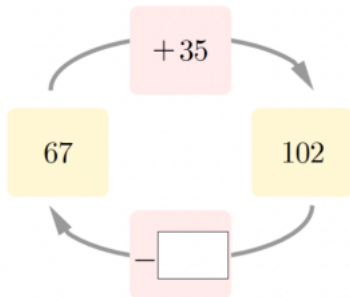
03 Fill in the blank

$$22 + 19 - \square = 15$$

04 Work out the calculation



05 write the missing number

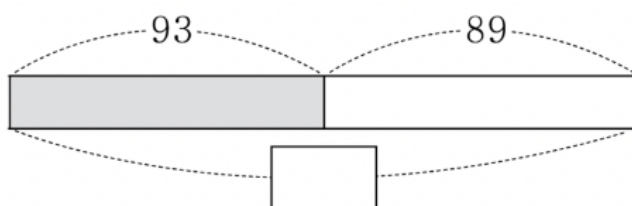


06

$$\begin{array}{r} 34 \\ - 8 \\ \hline \end{array}$$

07 Find the sum of 46 and 27

08 Use the bar model to complete the number sentences.

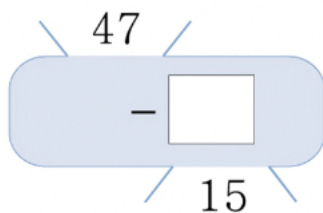


- 09 Noah has 43 apples. he eats 29 apples.  
How many apples are left?

- 10 work out

$$93 - 5 - 4$$

- 11 Fill in the missing number.



A subtraction problem is shown inside a light blue rounded rectangle. The number 47 is written above the rectangle with two diagonal lines extending from it. A minus sign is written to the left of a white square box. Below the box, the number 15 is written with two diagonal lines extending from it.

$$\begin{array}{r} 47 \\ - \square \\ \hline 15 \end{array}$$

01 14

02 5

03 26

04 38

05 35

06 26

07 73

08 182

09 14

10 84

11 32